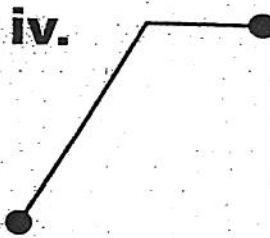
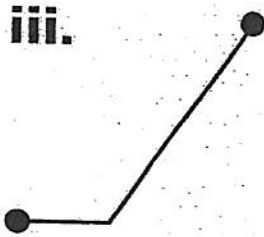
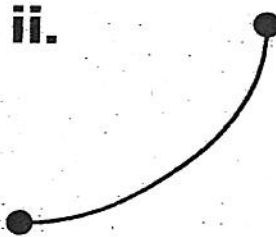
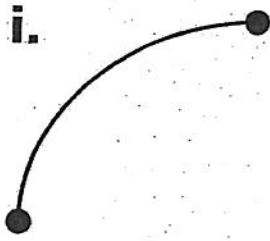


Name _____ Date _____ Grade 8 Science Group _____

C22. Calculate the average speed of a moving object and illustrate the motion of objects in graphs of distance over time.

Match each of these connecting paths with the travel notes below. Write the letter of the correct path to the left of the travel note. Explain your choice.



_____ 1. Celia rode slowly at first and then gradually increased her speed.

_____ 2. Tony and Liz rode quickly and reached the campsite early.

_____ 3. Malcolm had to fix a tire, so he started late.

_____ 4. Theo started off fast. He soon felt tired and slowed down.
